

Finding Durations of Time

Lesson 6

In Focus



She started to paint.



She finished painting.

How can we tell how long Holly took to paint?

Let's Learn

Method 1



5 minutes



35 minutes



2:05

2:10

2:45

$$5 + 35 = 40$$



Method 2



45 minutes



2:00

2:45



5 minutes



2:05

$$45 - 5 = 40$$



Holly took 40 minutes.

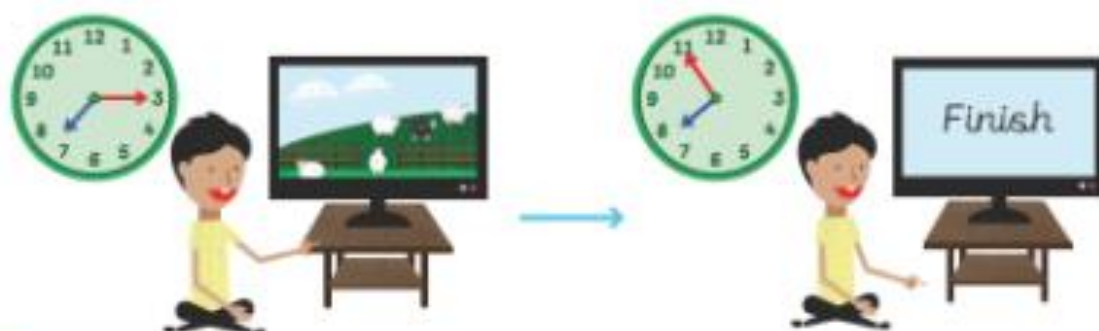
Guided Practice

How long did the kids take for each of the following activities?

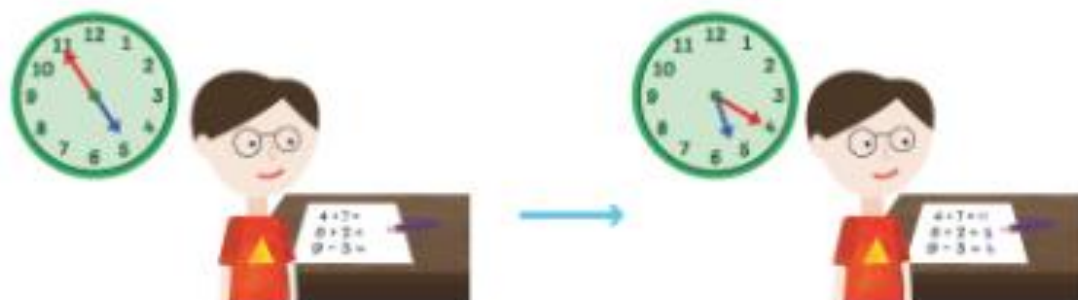
(a)



(b)



(c)



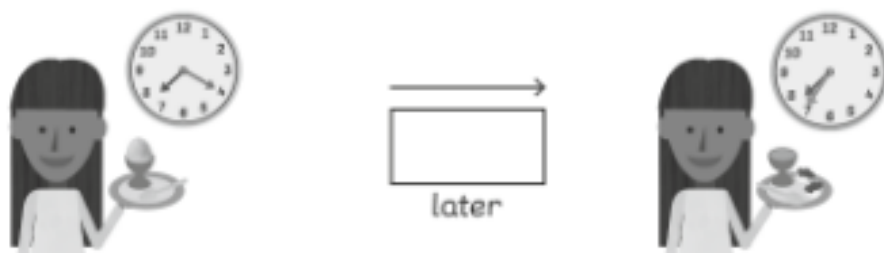
Name: _____ Class: _____ Date: _____

Worksheet 6

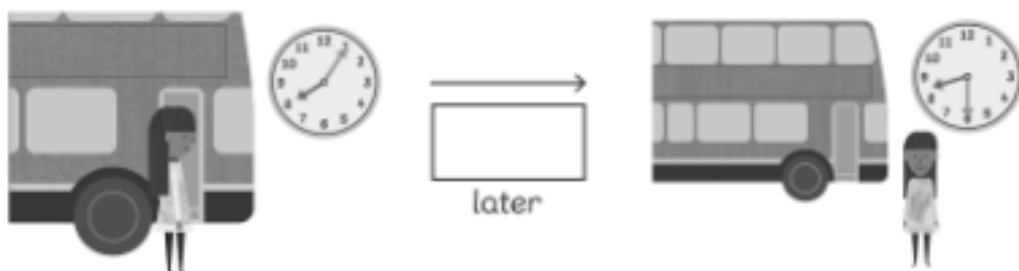
Finding Durations of Time

1 How long did Lulu take for each of the following activities?

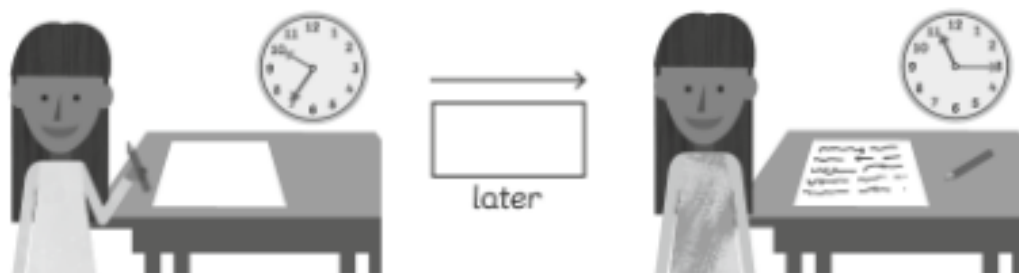
(a)



(b)



(c)



2 Write down the correct times in the table.

start time	What time will it be in 15 minutes?	What time will it be in 40 minutes?
